

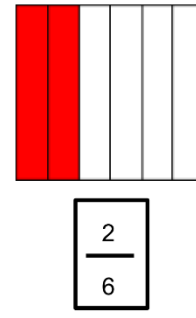
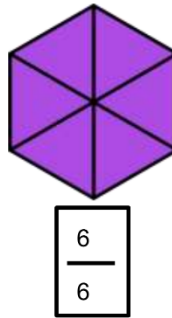
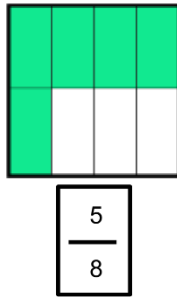
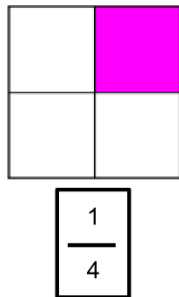
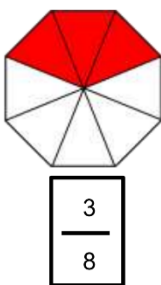
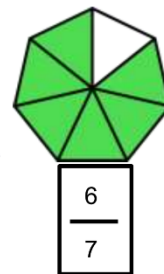
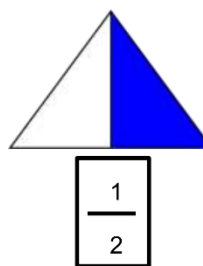
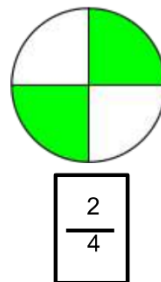
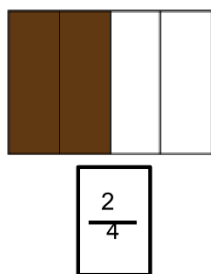
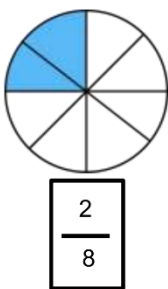


ΔΗΜΟΤΙΚΟ ΣΧΟΛΕΙΟ

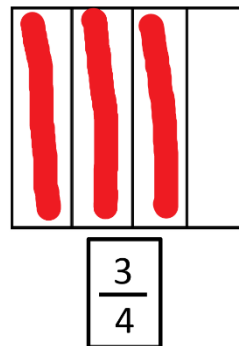

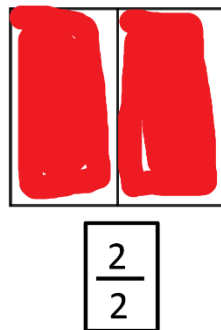
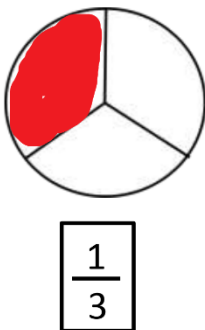
Όνομα: _____ Τάξη: _____


Ενότητα 5 (Κλάσματα)

1. Να γράψεις το κλάσμα που δείχνει τι μέρος του σχήματος είναι χρωματισμένο.

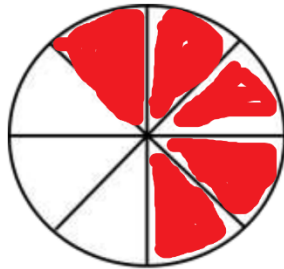


2. Να χρωματίσεις το σχήμα με βάση το κλάσμα που δίνεται.






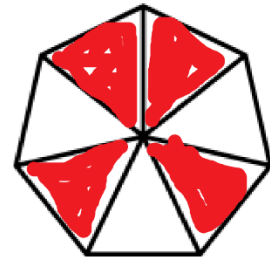
$$\frac{8}{10}$$



$$\frac{5}{8}$$

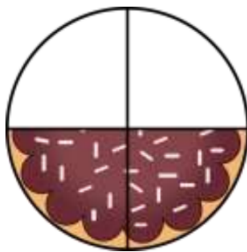


$$\frac{2}{5}$$

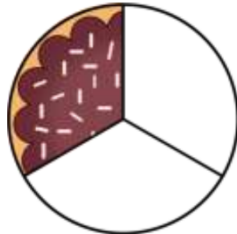


$$\frac{4}{7}$$

3. Ο Χρίστος κέρασε τους συμμαθητές του γλυκό. **Τι μέρος** του κάθε γλυκού έφαγε το κάθε παιδί;



Ο Λευτέρης έφαγε $\frac{2}{4}$ του γλυκού. Έμειναν $\frac{2}{4}$.



Ο Βαλάντω έφαγε $\frac{1}{3}$ του γλυκού. Έμειναν $\frac{2}{3}$.



Ο Χριστόφορος έφαγε $\frac{3}{5}$ του γλυκού. Έμειναν $\frac{2}{5}$.



Η Ιωάννα έφαγε $\frac{6}{8}$ του γλυκού. Έμειναν $\frac{2}{8}$.